

Describing position

Complete the sentences using 'left' and 'right' to describe the position of the coins.



The £1 coin is to the _____ of the 1p coin.

The 50p coin is to the _____ of the 1p coin.

The 2p coin is to the _____ of the 50p coin.



Mo

The pink doughnuts are on the left.

The pink doughnuts are on the right.



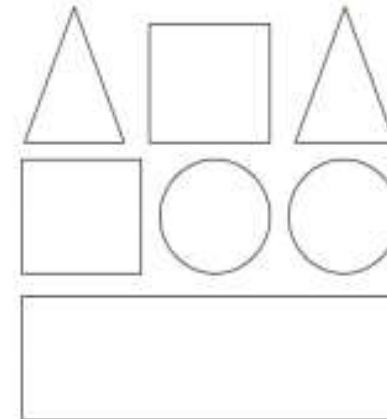
Alex



Who is correct?

Explain how you know.

Use the clues to colour the shapes.








- The circle in the middle is blue.
- The circle on the right is red.
- The shape up from the right circle is green.
- The shape down from the circles is green.
- The square to the left of the green triangle is red.
- The four-sided shape up from the rectangle is blue.
- The triangle on the left is red.

Describing position

How many different ways can you describe the position of the 2p coin?



Whitney	 Jack	
		
		 Dora

Jack is directly above Alex.
Eva is directly below Alex.
_____ is to the right of Eva.
There is no-one above Amir.
What are the missing names?
Add people to complete the grid and describe where they are.